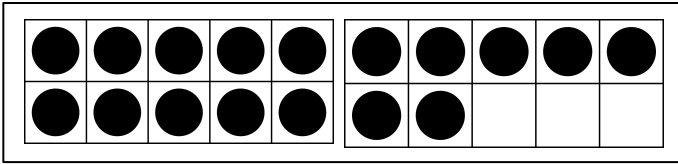
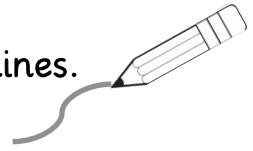


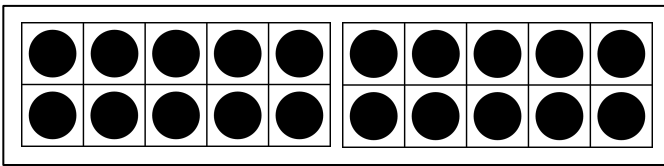
Name: _____

Date: _____

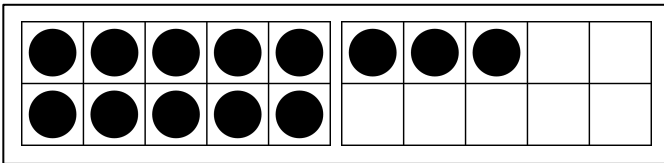
1) Match the number to the double ten frame! Draw lines.



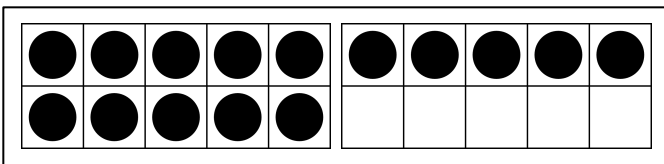
11



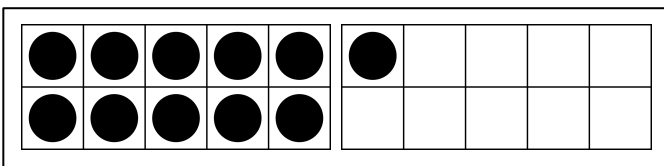
19



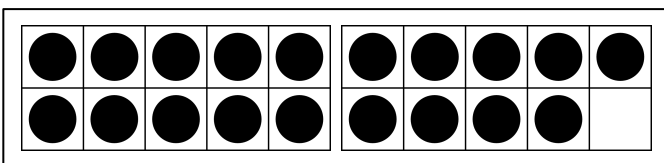
15



17



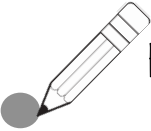
20



13

Name: _____

Date: _____

1)  Fill in the double ten frame to match the number.

$$\underline{\quad\quad} + \underline{\quad\quad} = 12$$

$$\underline{\quad\quad} + \underline{\quad\quad} = 14$$

$$\underline{\quad\quad} + \underline{\quad\quad} = 16$$

$$\underline{\quad\quad} + \underline{\quad\quad} = 18$$

$$\underline{\quad\quad} + \underline{\quad\quad} = 20$$

$$\underline{\quad\quad} + \underline{\quad\quad} = 17$$