

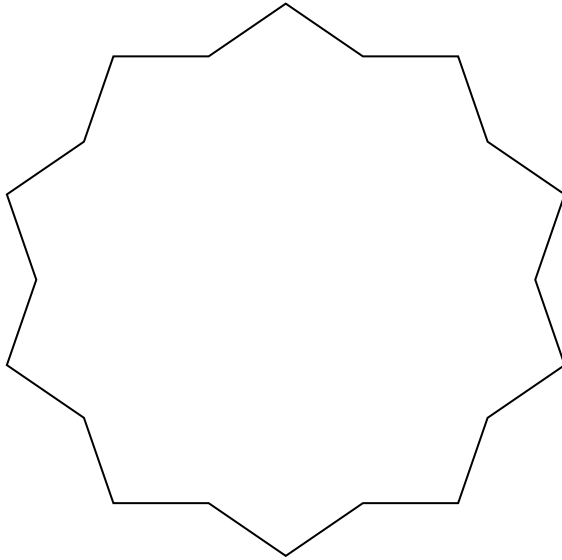
Number representation: Number of the day

Name: \_\_\_\_\_

Date: \_\_\_\_\_

Peanut's peanuts 2017

1.) Write it!



2.) Add it up!

	+	
	+	
	+	
	+	
	+	
	+	
	+	

3.) Draw the correct number of tally marks!



--

4.) Fill in the double ten frame to match that number!




Number representation: Number of the day

Name: PEANUT

Date: 5.10.2017

Peanut's peanuts 2017


1.) Write it!



2.) Add it up!

<b>13</b>		
1	+	12
11	+	2
3	+	10
5	+	8
4	+	9
6	+	7
7	+	6

3.) Draw the correct number of tally marks!



4.) Fill in the double ten frame to match that number!

